

6

Parcours A

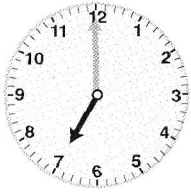
FICHER PAGES 20 ET 21

Lecture de l'heure

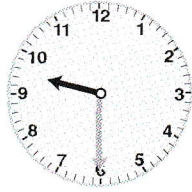


Si tu as besoin d'aide, regarde le Retenir à la page 24 de ton fichier.


A1 Écris ces heures.



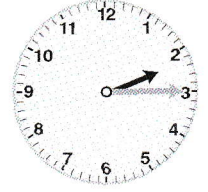
matin : 7 h 00



matin : 9 h 30




matin : 10 h 20



après-midi : 14 h 15

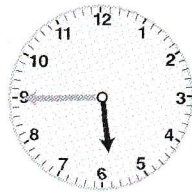
A2 Colorie l'heure correspondant à chaque pendule.



après-midi

06 h 10


18 h 10



matin

05 h 45


17 h 45



après-midi

02 h 05

14 h 05



soir

11 h 20

23 h 20

A3 Écris correctement ces heures de l'après-midi ou du soir.

• 05 h 30

17 h 30

• 03 h 15

15 h 15

• 08 h 45

20 h 45

• 10 h 20

22 h 20

A4 Entre quelles graduations la petite aiguille des heures se trouve-t-elle quand il est :

• 08 h 40 ? entre 8 h et 9 h

• 13 h 20 ? entre 1 h et 2 h


• 01 h 10 ? entre 1 h et 2 h

• 16 h 20 ? entre 4 h et 5 h

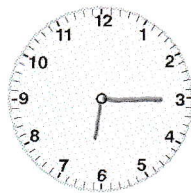
• 03 h 50 ? entre 3 h et 4 h

• 22 h 45 ? entre 10 h et 11 h


A5 Dessine les aiguilles sur les pendules. Attention ! positionne bien celle des heures.



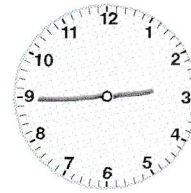
matin : 08 h 00




après-midi : 18 h 15



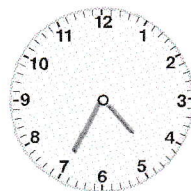
matin : 09 h 25




après-midi : 14 h 45



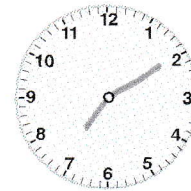
matin : 11 h 05



après-midi : 16 h 35



matin : 04 h 50



après-midi : 19 h 10